


**NYSMTA – DISTRICT 4 - Written Exam**  
**Theory Test - Primary Level - Sample      60 Points**


1. Name each note. Each group spells a word. (3pt/word: 30 points)



2. Write the number of beats each note or rest receives. (1pt/ea: 8 points)



3. How do you count these melodies? Write the counts for each measure under the notes. (1pt/bar: 10pts)

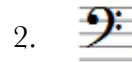


4. Match the terms in the left column by writing the number of the correct sign from the right column.  
(1pt/ea: 12 points)

Soft \_\_\_\_\_



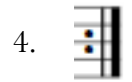
G Clef \_\_\_\_\_



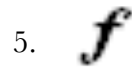
Half Note Rest \_\_\_\_\_




Loud \_\_\_\_\_




Repeat Sign \_\_\_\_\_




Double Bar Line \_\_\_\_\_



Whole Note \_\_\_\_\_




Grand Staff \_\_\_\_\_



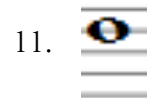
F Clef \_\_\_\_\_



Half Note \_\_\_\_\_



Quarter Note Rest \_\_\_\_\_



Whole Note Rest \_\_\_\_\_

